



Group the bananas into 2s.




How many groups do I have? _____

Group the bananas into 5s.



How many groups do I have? _____

Group the bananas into 10s.



How many groups do I have? _____

Group the bananas into 2s.



How many groups? _____

Group the bananas into 2s



How many groups? _____

Group the birds into 2s.



How many groups? _____

Group the birds into 5s.



How many groups? _____

Group the pens into 2s.



How many groups? _____