
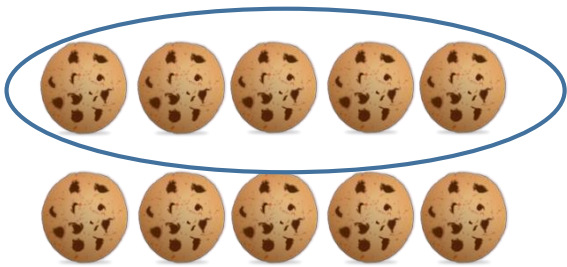
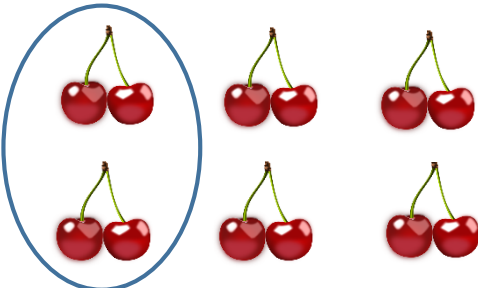

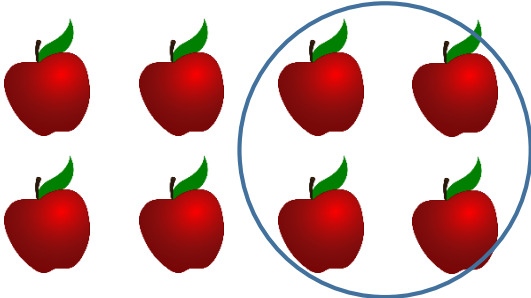





Unit Fractions

Learning Outcome: To identify the unit fractions: $\frac{1}{2}$, $\frac{1}{3}$, $\frac{1}{4}$


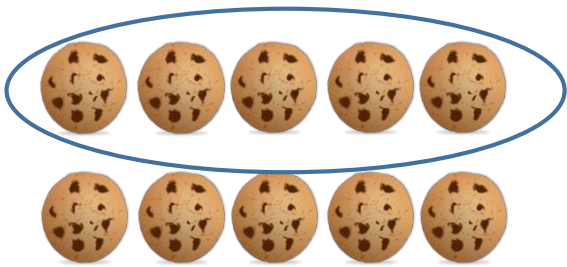
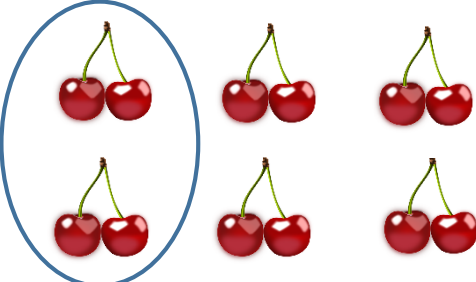




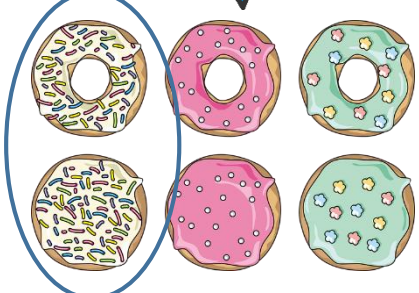
Task: Tick the fraction of objects that have been circled.

	
<p>$\frac{1}{2}$ $\frac{1}{3}$ $\frac{1}{4}$</p>	<p>$\frac{1}{2}$ $\frac{1}{3}$ $\frac{1}{4}$</p>
	
<p>$\frac{1}{2}$ $\frac{1}{3}$ $\frac{1}{4}$</p>	<p>$\frac{1}{2}$ $\frac{1}{3}$ $\frac{1}{4}$</p>
	
<p>$\frac{1}{2}$ $\frac{1}{3}$ $\frac{1}{4}$</p>	<p>$\frac{1}{2}$ $\frac{1}{3}$ $\frac{1}{4}$</p>
	
<p>$\frac{1}{2}$ $\frac{1}{3}$ $\frac{1}{4}$</p>	<p>$\frac{1}{2}$ $\frac{1}{3}$ $\frac{1}{4}$</p>

Unit Fractions Answers

Learning Outcome: To identify the unit fractions: $\frac{1}{2}$, $\frac{1}{3}$, $\frac{1}{4}$

Task: Tick the fraction of objects that have been circled.

	
$\frac{1}{2}$ <input checked="" type="checkbox"/> $\frac{1}{3}$ $\frac{1}{4}$	$\frac{1}{2}$ <input checked="" type="checkbox"/> $\frac{1}{3}$ $\frac{1}{4}$
	
$\frac{1}{2}$ <input checked="" type="checkbox"/> $\frac{1}{3}$ $\frac{1}{4}$	$\frac{1}{2}$ $\frac{1}{3}$ $\frac{1}{4}$ <input checked="" type="checkbox"/>
	
$\frac{1}{2}$ <input checked="" type="checkbox"/> $\frac{1}{3}$ $\frac{1}{4}$	$\frac{1}{2}$ $\frac{1}{3}$ <input checked="" type="checkbox"/> $\frac{1}{4}$
	
$\frac{1}{2}$ <input checked="" type="checkbox"/> $\frac{1}{3}$ $\frac{1}{4}$	$\frac{1}{2}$ $\frac{1}{3}$ <input checked="" type="checkbox"/> $\frac{1}{4}$