










Year 1 challenge

Comparing Numbers Within 50

1	2	3	4	5	6	7	8	9	10
11	12	13	14	15	16	17	18	19	20
21	22	23	24	25	26	27	28	29	30
31	32	33	34	35	36	37	38	39	40
41	42	43	44	45	46	47	48	49	50

Write each number on the line and the correct symbol (< > =) in the box:

 _____ 24 _____ <input type="checkbox"/> _____ 41 _____ 	$33+1=$ _____ <input type="checkbox"/> $30+4=$ _____
Two tens + seven ones = _____ <input type="checkbox"/> One ten + seven ones = _____	 _____ <input type="checkbox"/> _____  _____
$49-1=$ _____ <input type="checkbox"/> $40-10=$ _____	12 <input type="checkbox"/> 21
 _____ <input type="checkbox"/> _____ 	Twenty <input type="checkbox"/> Forty four
 _____ <input type="checkbox"/> _____ 	 _____ <input type="checkbox"/> _____ 