

Place Value to 10

1.


How many teddy bears are there?



There are ____ teddy bears.

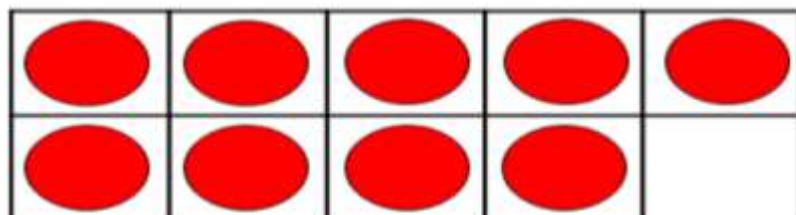
2.

Circle 7 apples.



3.

How many counters are there?



There are ____ counters.

4.

Circle the number four.

1 3 4 6

Circle the smallest number.

7 2 10 9

5.

Complete the missing numbers.

6	5	4				
---	---	---	--	--	--	--

6.

Complete the boxes.

1 more than 7 is

1 more than is 5

7.

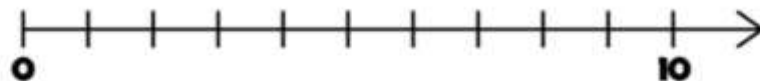
Write a number in each box to complete the sentences.

7 is greater than

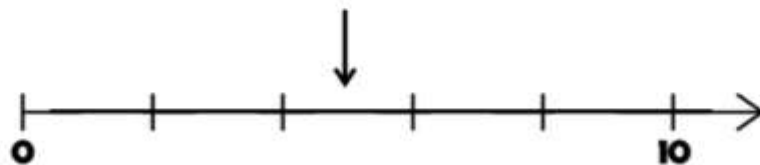
< 3

8.

Draw an arrow to number 3



What number is the arrow pointing to?



The arrow is pointing to the number