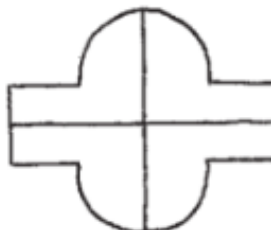
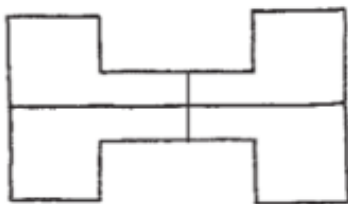
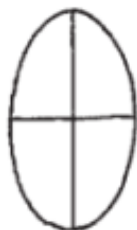
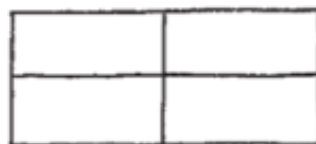
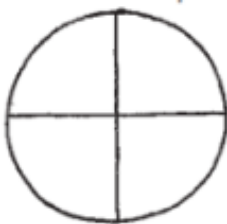

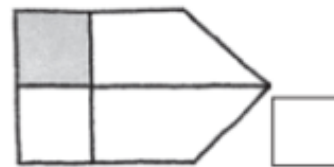
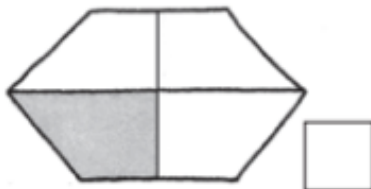
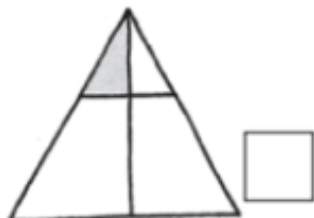
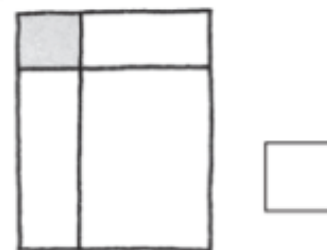



Finding $\frac{1}{4}$ of a shape.

Colour one quarter $\frac{1}{4}$ of each shape.



Write a \checkmark in the box if $\frac{1}{4}$ of the figure is shaded and a \times if less than $\frac{1}{4}$ is shaded.



Colour one quarter $\frac{1}{4}$ of each shape.

